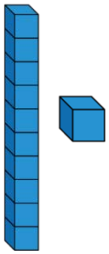


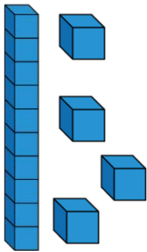
# Count One More & One Less

- 1 Make one more and one less than the following numbers and complete the sentences.



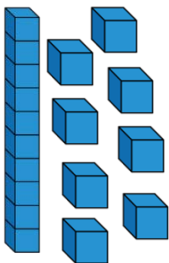
One more than ..... is .....

One less than ..... is .....



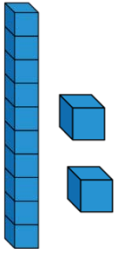
One more than ..... is .....

One less than ..... is .....



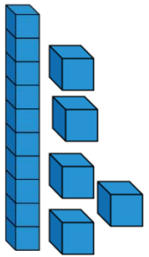
One more than ..... is .....

One less than ..... is .....



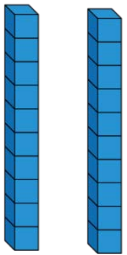
One more than ..... is .....

One less than ..... is .....



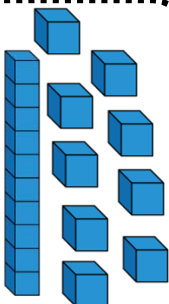
One more than ..... is .....

One less than ..... is .....



One more than ..... is .....

One less than ..... is .....



One more than ..... is .....

One less than ..... is .....

# Count One More & One Less

- 2 Complete missing boxes. You might want to use concrete manipulatives to help you.

One Less

One More

15

19


11

13



# Count One More & One Less

One Less



One More





10




16



12





18



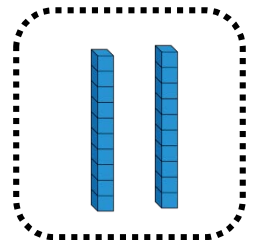









# Count One More & One Less

- 3 Complete missing boxes. You might want to use concrete manipulatives to help you.

One Less



One More



# Count One More & One Less

One Less

One More

