

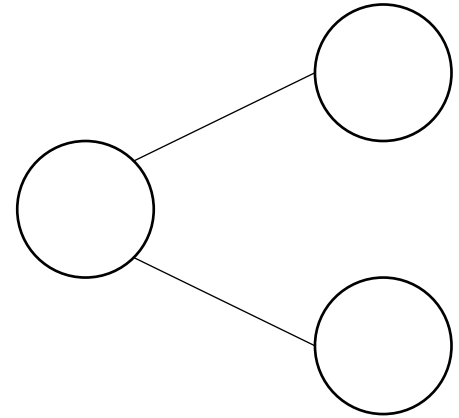
# Subtraction - Not Crossing 10

Answer the subtraction problem. Show your answer using ten frames and counters, a part whole model, a number line and as a subtraction sentence.

Ten Frames

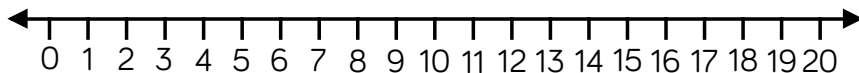

Part Whole Model



Worded Problem

First there were 16 horses in a field.  
Then 5 of them ran away.  
How many horses are left in the field?

Number Line



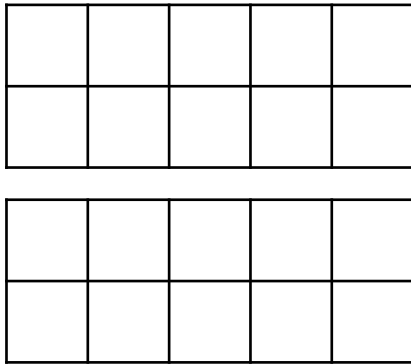
Subtraction Sentence

$$\square - \square = \square$$

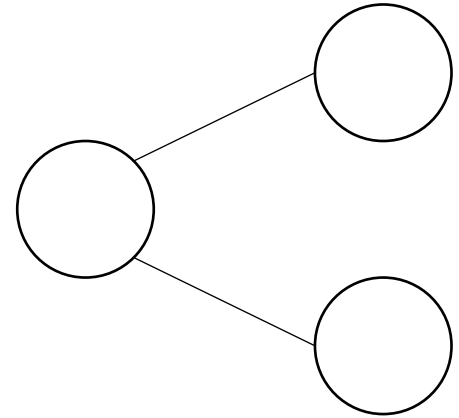
# Subtraction - Not Crossing 10

Answer the subtraction problem. Show your answer using ten frames and counters, a part whole model, a number line and as a subtraction sentence.

Ten Frames



Part Whole Model



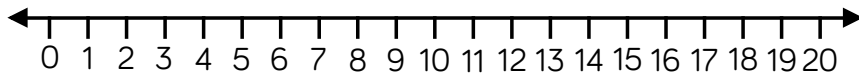
Worded Problem

First there were 19 sweets.

Then 4 of them were eaten.

How many sweets are left?

Number Line



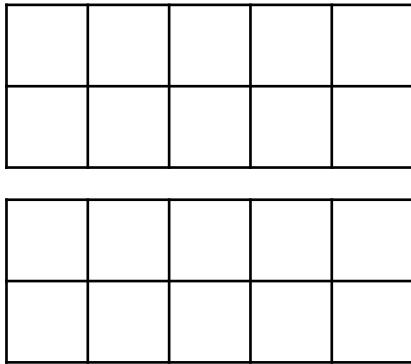
Subtraction Sentence

$$\square - \square = \square$$

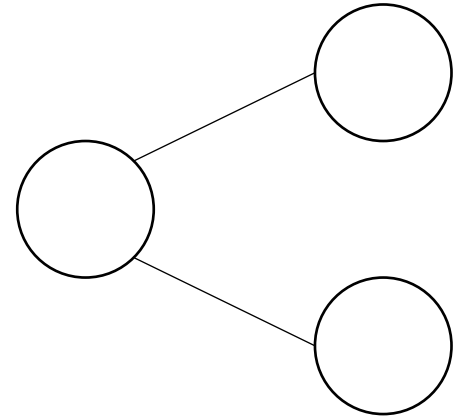
# Subtraction - Not Crossing 10

Answer the subtraction problem. Show your answer using ten frames and counters, a part whole model, a number line and as a subtraction sentence.

Ten Frames



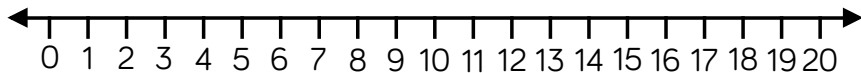
Part Whole Model



Worded Problem

First there were 12 cakes.  
Then one of them was eaten.  
How many cakes are left?

Number Line



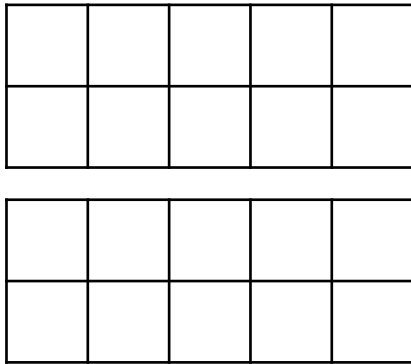
Subtraction Sentence

$$\square - \square = \square$$

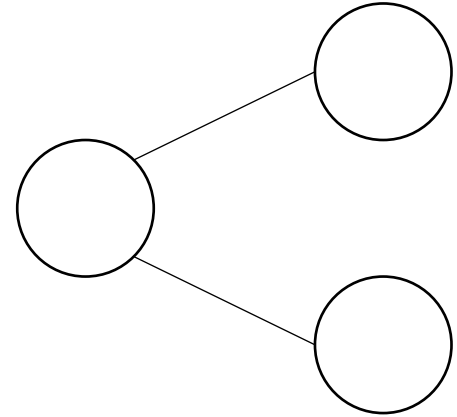
# Subtraction - Not Crossing 10

Answer the subtraction problem. Show your answer using ten frames and counters, a part whole model, a number line and as a subtraction sentence.

Ten Frames



Part Whole Model



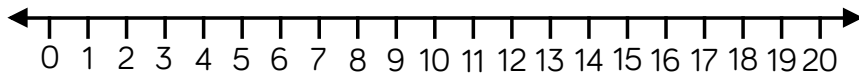
Worded Problem

First there were 17 balloons.

Then 6 of them burst.

How many balloons are left?

Number Line



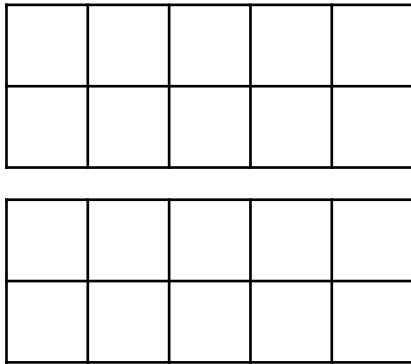
Subtraction Sentence

$$\square - \square = \square$$

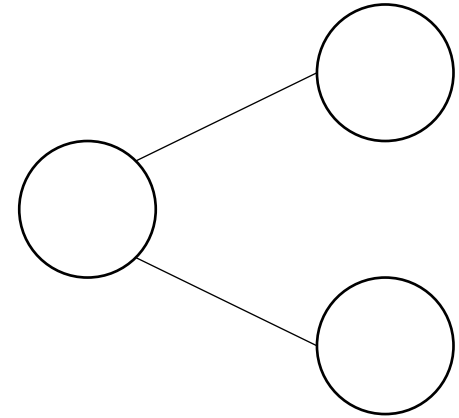
# Subtraction - Not Crossing 10

Answer the subtraction problem. Show your answer using ten frames and counters, a part whole model, a number line and as a subtraction sentence.

Ten Frames



Part Whole Model

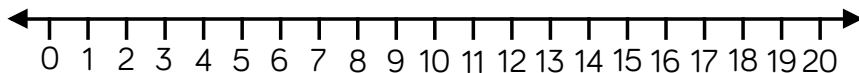


Worded Problem

First there were 13 people at a party. Then 2 of them left.

How many people are left at the party?

Number Line



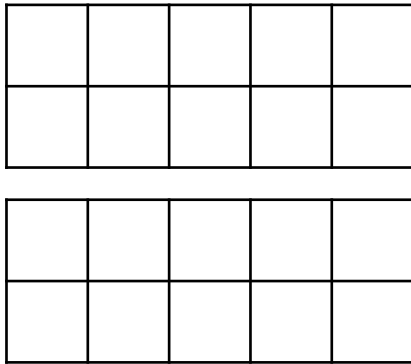
Subtraction Sentence

$$\square - \square = \square$$

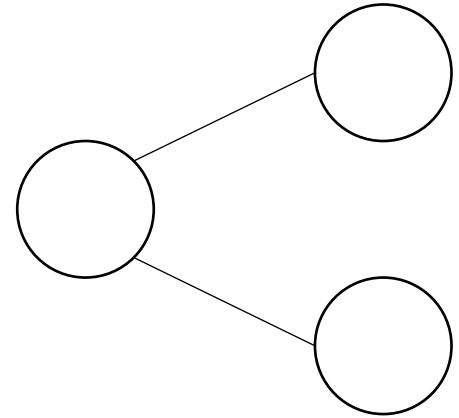
# Subtraction - Not Crossing 10

Answer the subtraction problem. Show your answer using ten frames and counters, a part whole model, a number line and as a subtraction sentence.

Ten Frames



Part Whole Model



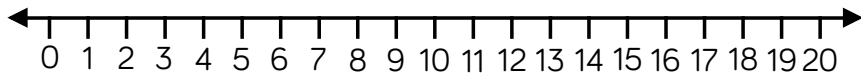
Worded Problem

First there were 18 people on a bus.

7 of them got off.

How many people are left on the bus?

Number Line



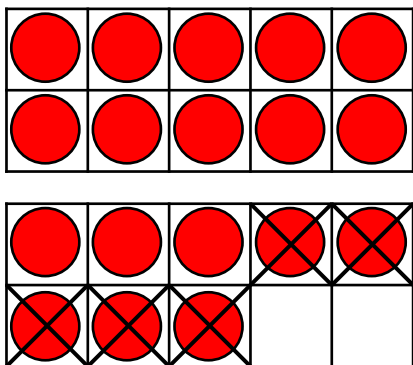
Subtraction Sentence

$$\square - \square = \square$$

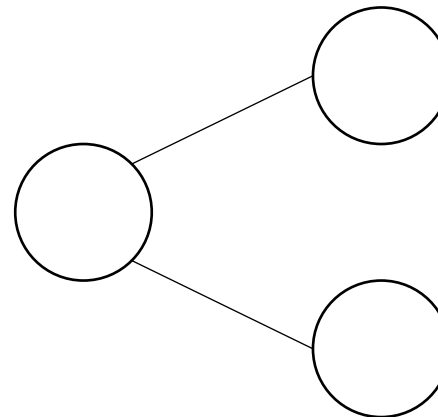
# Subtraction - Not Crossing 10

Fill in the missing boxes.

Ten Frames



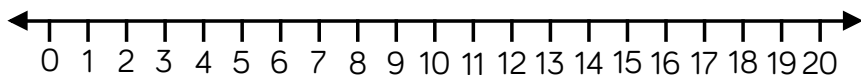
Part Whole Model



Worded Problem

Blank area for writing a worded problem.

Number Line



Subtraction Sentence

$$\square - \square = \square$$

# Subtraction - Not Crossing 10

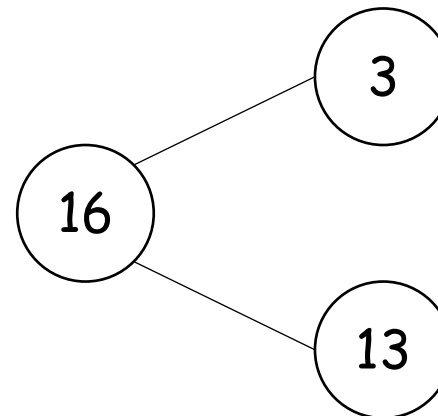
Fill in the missing boxes.

Ten Frames

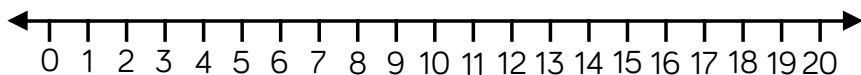

  


Worded Problem

Part Whole Model



Number Line



Subtraction Sentence

$$\square - \square = \square$$



# Subtraction - Not Crossing 10

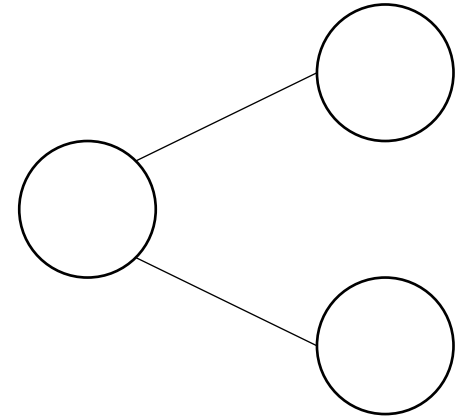
Fill in the missing boxes.

Ten Frames

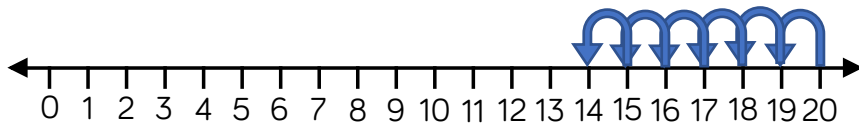

  


Worded Problem

Part Whole Model



Number Line



Subtraction Sentence

$$\boxed{\phantom{00}} - \boxed{\phantom{00}} = \boxed{\phantom{00}}$$

# Subtraction - Not Crossing 10

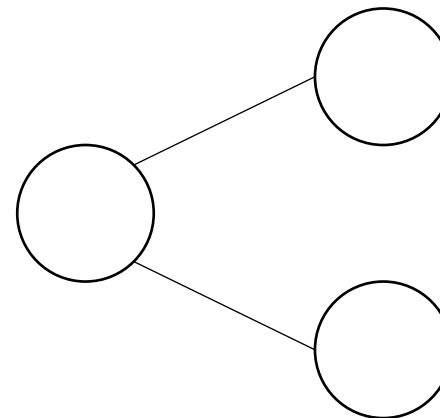
Fill in the missing boxes.

Ten Frames

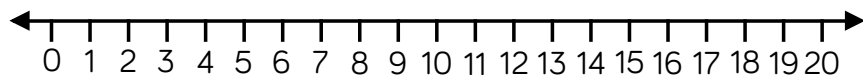

  


Worded Problem

Part Whole Model



Number Line



Subtraction Sentence

$$14 - 1 = 13$$